

GRD WORLD SCHOOL, BHAWALA, DEHRADUN

WINTER – HOLIDAY HOME WORK

SUBJECT: EVS

Q1. Write 5 lines on Plants.

1.

2.

3.

4.

5.

Q2. Write 5 lines on Animals.

1.

2.

3.

4.

5.









Q3. Paste the pictures 5 Domestic animals, 5 Pet animals, 5 wild animals in your scrap book.

Computer Worksheet

Name : _____

Date : _____

Find the given one is hardware or software

 Monitor	<input type="checkbox"/> Hardware <input type="checkbox"/> Software
 MS Excel	<input type="checkbox"/> Hardware <input type="checkbox"/> Software
 Printer	<input type="checkbox"/> Hardware <input type="checkbox"/> Software
 Tux Paint	<input type="checkbox"/> Hardware <input type="checkbox"/> Software
 Pen Drive	<input type="checkbox"/> Hardware <input type="checkbox"/> Software
 ZOOM App	<input type="checkbox"/> Hardware <input type="checkbox"/> Software
 WINDOWS 7	<input type="checkbox"/> Hardware <input type="checkbox"/> Software
 Mouse	<input type="checkbox"/> Hardware <input type="checkbox"/> Software

Find and tick (✓) the correct answer.

	<input type="checkbox"/> Television <input type="checkbox"/> Printer <input type="checkbox"/> Monitor		<input type="checkbox"/> CPU <input type="checkbox"/> Webcam <input type="checkbox"/> Monitor
	<input type="checkbox"/> Hard disk <input type="checkbox"/> Joy stick <input type="checkbox"/> Projector		<input type="checkbox"/> Microphone <input type="checkbox"/> Speaker <input type="checkbox"/> Headset
	<input type="checkbox"/> CD/DVD <input type="checkbox"/> Data card <input type="checkbox"/> Pen drive		<input type="checkbox"/> Scanner <input type="checkbox"/> Printer <input type="checkbox"/> Hard disk
	<input type="checkbox"/> Hard disk <input type="checkbox"/> Touch screen <input type="checkbox"/> Light pen		<input type="checkbox"/> Webcam <input type="checkbox"/> Scanner <input type="checkbox"/> Projector

Subject- English

Q.1 Write four lines about 'My School':



1. _____
2. _____
3. _____
4. _____

Remarks & Sign: _____

Q.1 Fill in the blanks with is, am or are. Remember the rules for I and You!

1. The small boy _____ hungry.
2. My ball _____ yellow in color.
3. There _____ many ducks in the pond.
4. How old _____ you?
5. You _____ a good girl.
6. The children _____ in a classroom.
7. Today _____ a holiday.
8. The cows _____ in the field.
9. My father _____ a doctor.
10. Vijay _____ not at home.
11. The books _____ on the table.
12. I _____ the tallest boy in the class.
13. I _____ a good swimmer.
14. I _____ not a painter.
15. _____ you Mark's brother?



Remarks & Sign: _____



Name _____

Date _____

A. Fill in the blanks with “has” or “have.”

1. The boy _____ short hair.
2. A car _____ four wheels.
3. They _____ a big house.
4. We _____ lots of books.
5. It _____ a long tail.
6. An elephant _____ a long trunk.
7. Some girls _____ long hair.
8. A goat _____ horns.
9. Ducks _____ web feet.
10. The tiger _____ black stripes.

B. Make sentences using “has” or “have.”

1. mother- _____.
2. birds- _____.

Remarks: _____

Sign: _____



GRD WORLD SCHOOL

BHAUWALA, DEHRADUN

शीतकालीन अवकाश गृह कार्य

CLASS -1st

Subject -hindi

Hindi Workbook

1. निम्नलिखित प्रश्नों के उत्तर लिखो-

(क) रसोईघर में क्या करते हैं?

(ख) रोटी किससे बेलते हैं?

(ग) सब्जी किससे छीली जाती है?

(घ) थाली किस काम आती है?

ड). रसोईघर में काम आने वाले आठ बर्तनों के नाम लिखो

4. एक ऐसी सब्जी जिसे भून कर बनाया जाता है-

5. खाने की दो ऐसी चीजें जो तलकर बनाई जाती हैं-

दो ऐसी चीजें जो सेंक कर खाई जाती हैं-

7. साग को किससे काटोगे?

पहँसुल से

8. गिलास किस काम आता है?

गिलास पानी, दूध डालकर पीने के काम आता है।

१. चाय को किससे छानते हैं?

छलनी से

GRD World School , Bhauwala

Holiday Homework Grade 1 Subject - Maths

Q1. Add the numbers

$$\begin{array}{r} 6 \\ +2 \\ \hline \end{array}$$

$$\begin{array}{r} 5 \\ +4 \\ \hline \end{array}$$

$$\begin{array}{r} 9 \\ +1 \\ \hline \end{array}$$

$$\begin{array}{r} 5 \\ +3 \\ \hline \end{array}$$

$$\begin{array}{r} 3 \\ +2 \\ \hline \end{array}$$

$$\begin{array}{r} 2 \\ +2 \\ \hline \end{array}$$

Q2. Subtract the numbers

$$\begin{array}{r} 5 \\ -2 \\ \hline \end{array}$$

$$\begin{array}{r} 10 \\ -5 \\ \hline \end{array}$$

$$\begin{array}{r} 5 \\ -2 \\ \hline \end{array}$$

$$\begin{array}{r} 6 \\ -3 \\ \hline \end{array}$$

$$\begin{array}{r} 10 \\ -4 \\ \hline \end{array}$$

$$\begin{array}{r} 8 \\ -4 \\ \hline \end{array}$$

Q3. Dodging numbers

5	2	3	4	3	2	5
x2	x6	x9	x5	x7	x4	x3
<input type="text"/>	<input type="text"/>	<input type="text"/>	<input type="text"/>	<input type="text"/>	<input type="text"/>	<input type="text"/>

Q4. Find the missing number

1 _____ 3 _____ 5 _____ 7 _____ 9 _____ 11 _____ 13 _____ 14 _____

Q5. Greater , smaller and equal

5 3 2 4 5 5 3 2 1 3 4 7 2 2

Q6. Follow the number and colour the picture

